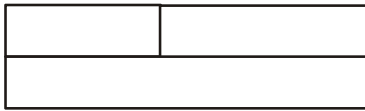


Addizioni con i regoli

Osserva l'esempio e continua tu usando i regoli:


(3,4)




7

$$3 + 4 = 7$$


(6,3)




(6,2)




(4,2)



(3,2)




(5,2)



(2,2)



(8,1)




Addizioni con i regoli


(7,1)




(5,4)



(4,4)



(7,2)




(6,1)



(5,3)



(1,3)



(3,3)

